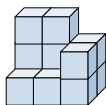







Solve each problem.

Answers

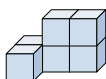
1) If you were looking at the 3d shape from the right side what would you see?






A.  B.  C. 

1. _____

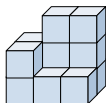
2) If you were looking at the 3d shape from the right side what would you see?






A.  B.  C. 

2. _____

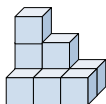
3) If you were looking at the 3d shape from the left side what would you see?






A.  B.  C. 

3. _____

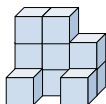
4) If you were looking at the 3d shape from above what would you see?






A.  B.  C. 

4. _____

5) If you were looking at the 3d shape from the right side what would you see?



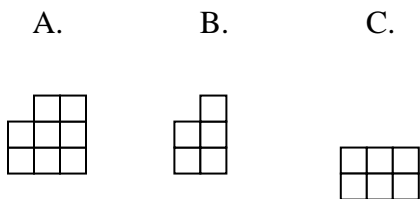
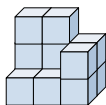
A.  B.  C. 

5. _____



Solve each problem.

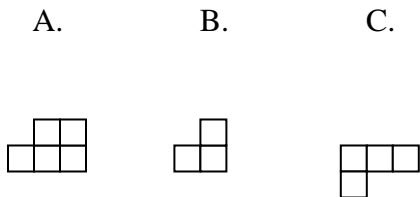
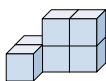
1) If you were looking at the 3d shape from the right side what would you see?



Answers

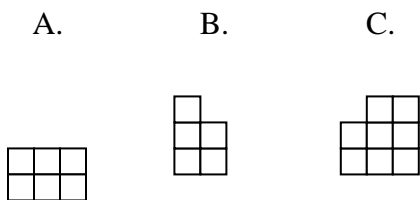
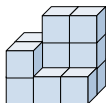
1. **B**

2) If you were looking at the 3d shape from the right side what would you see?



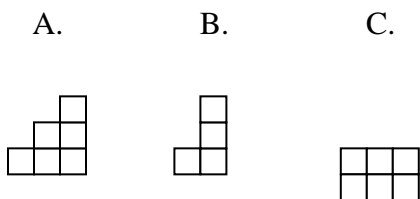
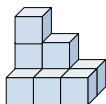
2. **B**

3) If you were looking at the 3d shape from the left side what would you see?



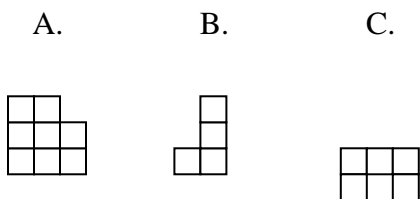
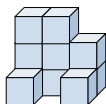
3. **B**

4) If you were looking at the 3d shape from above what would you see?



4. **C**

5) If you were looking at the 3d shape from the right side what would you see?



5. **B**